


Name: _____

Klasse: _____

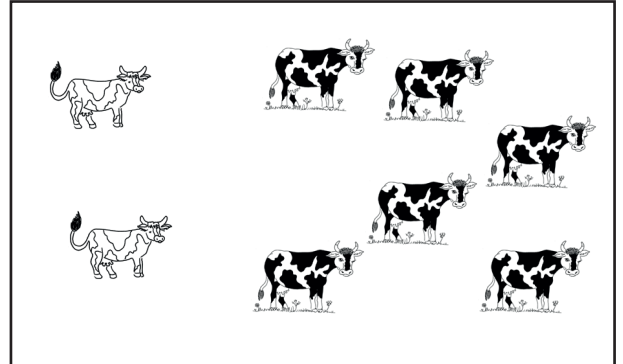
Datum: _____

Wir zählen zusammen

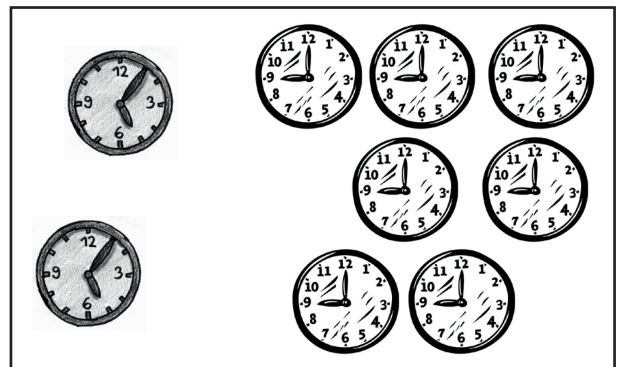



Finde die Aufgabe und rechne!



$$4 + 3 =$$



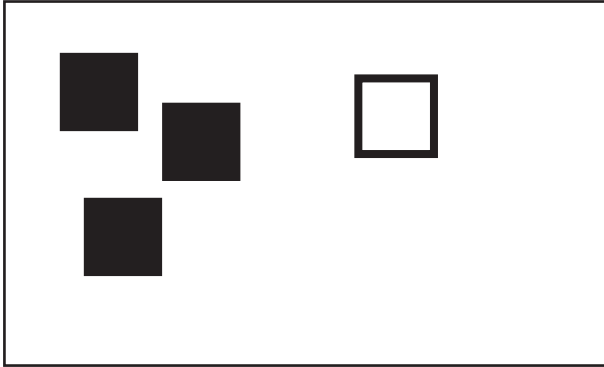
$$2 + 6 =$$



Name: _____ Klasse: _____ Datum: _____

Wir zählen zusammen

Male und rechne!



$$3 + 3 =$$



$$2 + 5 =$$



$$7 + 3 =$$



$$5 + 4 =$$



$$1 + 6 =$$

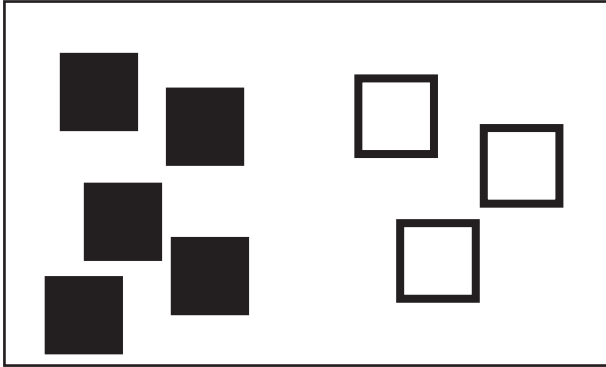


$$6 + 2 =$$

Name: _____ Klasse: _____ Datum: _____

Wir zählen zusammen

Wie viele kommen dazu? Male und rechne!




$$5 + \quad = 8$$



$$2 + \quad = 5$$



$$8 + \quad = 10$$



$$\quad + 3 = 9$$



$$\quad + 4 = 8$$



$$\quad + 2 = 7$$

Name: _____ Klasse: _____ Datum: _____

Wir zählen zusammen

Rechne!

$1 + 5 = \underline{\quad}$

$4 + 1 = \underline{\quad}$

$3 + 4 = \underline{\quad}$

$7 + 2 = \underline{\quad}$

$2 + 8 = \underline{\quad}$

$5 + 5 = \underline{\quad}$

$9 + 1 = \underline{\quad}$

$6 + 4 = \underline{\quad}$

$4 + 5 = \underline{\quad}$

$5 + 2 = \underline{\quad}$

$8 + 1 = \underline{\quad}$

$6 + 2 = \underline{\quad}$

$3 + 6 = \underline{\quad}$

$1 + 7 = \underline{\quad}$

$2 + 2 = \underline{\quad}$

Fülle die Lücken!

$1 + \underline{\quad} = 9$

$\underline{\quad} + 1 = 6$

$3 + \underline{\quad} = 9$

$\underline{\quad} + 2 = 6$

$2 + \underline{\quad} = 5$

$\underline{\quad} + 5 = 7$

$6 + \underline{\quad} = 8$

$\underline{\quad} + 4 = 8$

$4 + \underline{\quad} = 10$

$\underline{\quad} + 3 = 4$

$8 + \underline{\quad} = 10$

$\underline{\quad} + 5 = 8$

$3 + \underline{\quad} = 6$

$\underline{\quad} + 7 = 9$

$2 + \underline{\quad} = 4$

Finde Rechenaufgaben!

$10 = \underline{\quad} + \underline{\quad}$

$10 = \underline{\quad} + \underline{\quad}$

$10 = \underline{\quad} + \underline{\quad}$

$10 = \underline{\quad} + \underline{\quad}$

$10 = \underline{\quad} + \underline{\quad}$

$10 = \underline{\quad} + \underline{\quad}$

$10 = \underline{\quad} + \underline{\quad}$

$10 = \underline{\quad} + \underline{\quad}$

$10 = \underline{\quad} + \underline{\quad}$

Finde Rechenaufgaben mit den Ergebnissen 6, 7, 8 und 9. Schreibe die Aufgaben in dein Heft!